
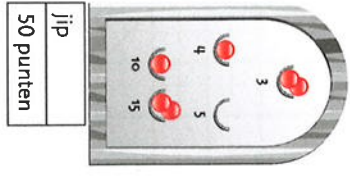




1 speel met 6 ballen.
teken ze.

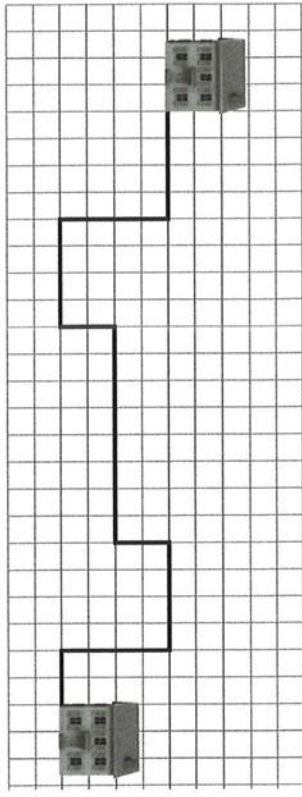
meer antwoorden.



2 hoe lang is de hele weg?

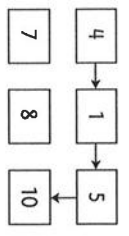
1 km 17 km

tip!

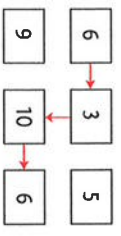


3 teken de pijlen.

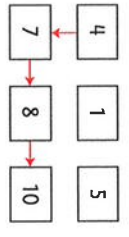
samen 20



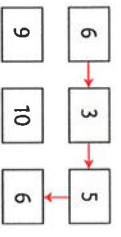
samen 25



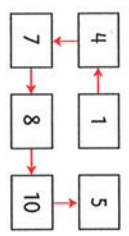
samen 29



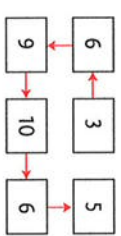
samen 20




samen 35




samen 39



4 kleur elke vlag anders.
gebruik 3 kleuren.




5 wat is meer?
kleur dat vak rood.




of



of



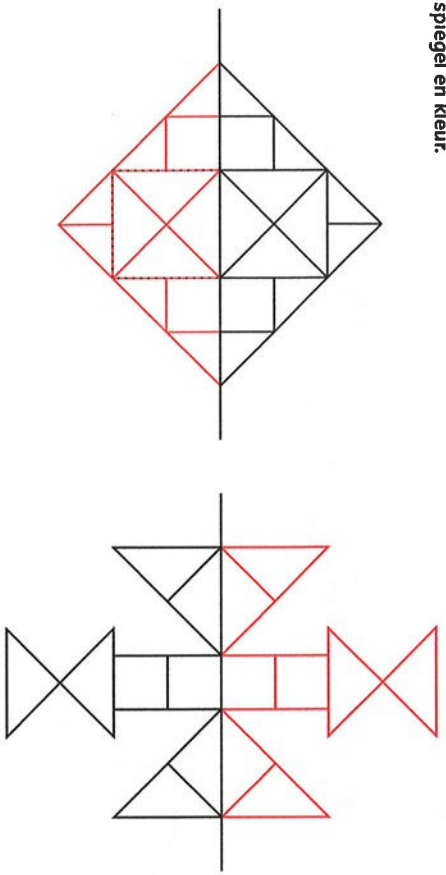
of



of



6 spiegel en kleur.



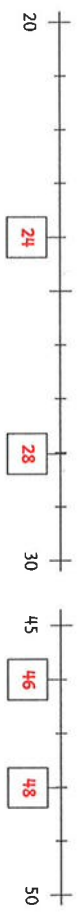
7 vul in. steeds 15. meer antwoorden.

4	6	5
6	5	4
5	4	6

3	7	5
7	5	3
5	3	7

4	8	3
2	5	8
9	2	4

8 welke getallen in de hokjes?



tip!

9 snobbelen.

8 + 3 = 11

11 + 1 = 12

12 - 4 = 8

1 8 3 4

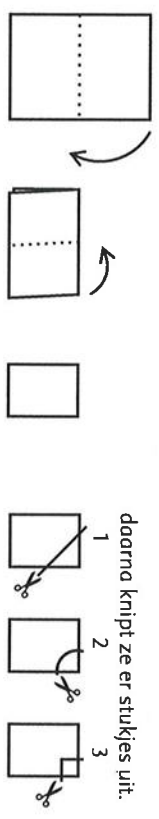
9 + 7 = 16

16 - 6 = 10

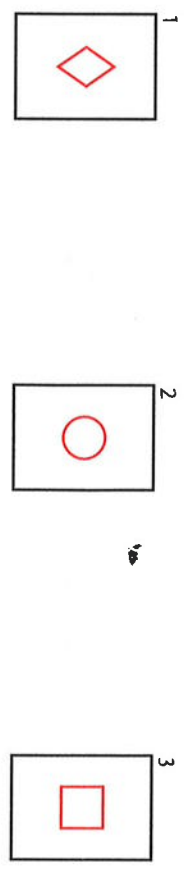
10 - 2 = 8

2 6 7 9

10 vouwen. roos vouwt een blaadje 2 keer dubbel.



ze vouwt de blaadjes weer open. hoe zien ze er nu uit?



11 in welke bakken zit evenveel? kleur in dezelfde kleur.

12

Kleur in.

4 kleuren: blauw, geel, rood en groen.
 elke rij, elke kolom en de 2 diagonalen (schuin) moeten verschillende kleuren hebben.
 dus bijvoorbeeld: blauw – geel – rood – groen.
 en niet: blauw – blauw – rood – groen.

blauw	groen	rood	geel
geel	rood	groen	blauw
groen	blauw	geel	rood
rood	geel	blauw	groen

meer antwoorden.

13

rij van fibonacci.
 kijk goed en vul in.

1	2	3	5	8	13	21	34	55
---	---	---	---	---	----	----	----	----

nu nog een keer.

3	4	7	11	18	29	47	76
---	---	---	----	----	----	----	----

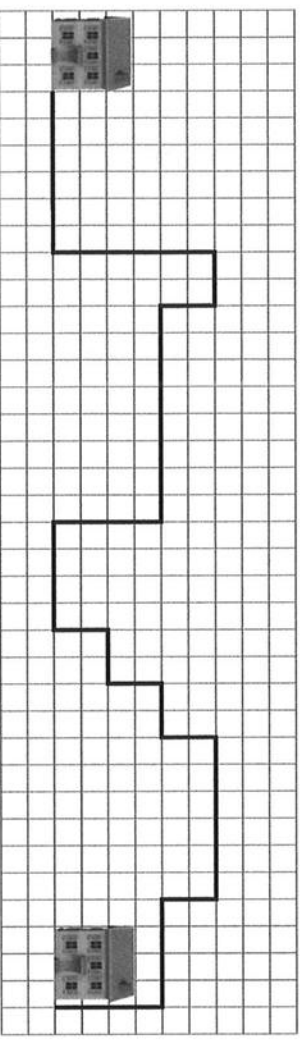
maak er nu zelf één: meer antwoorden.

6	8	14	22	36	58	94	152
---	---	----	----	----	----	----	-----

14

hoe lang is de hele weg?

1 km 29 km



15

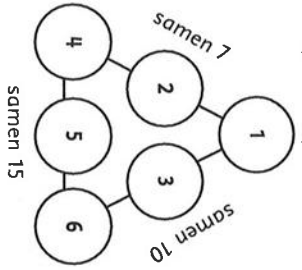
hoeveel heb je over?

je hebt: 	je koopt: 	je hebt over: €11
		€3
		€5
		€8
		€16
		€3

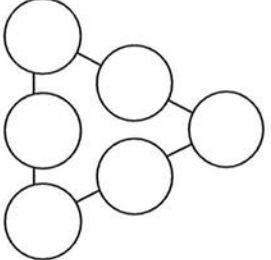
16

toverdriehoeken.
vul de getallen 1, 2, 3, 4, 5, 6 in.

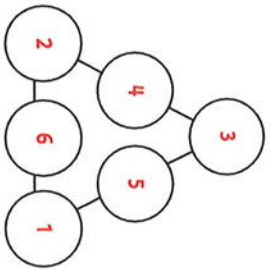
de zijden kun je optellen.



oefenen.



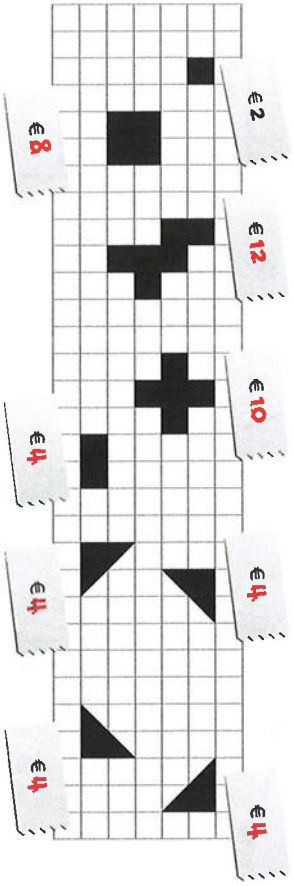
nu elke zijde 9.



tip!

17

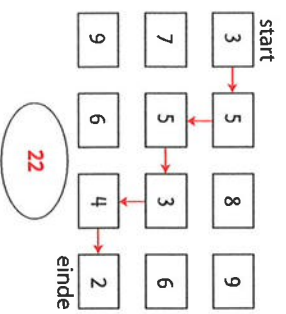
hoeveel euro?



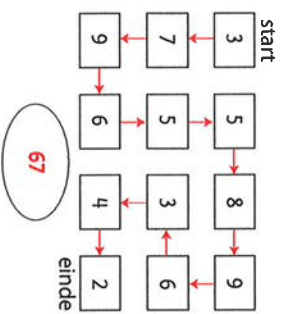
tip!

18

teken de pijlen. **meer antwoorden.**
samen de minste punten.



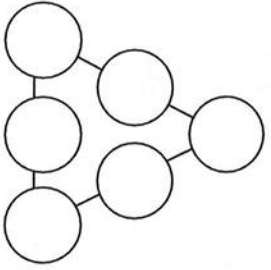
samen de meeste punten.



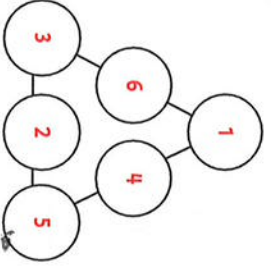
19

toverdriehoeken.
vul de getallen 1, 2, 3, 4, 5, 6 in.

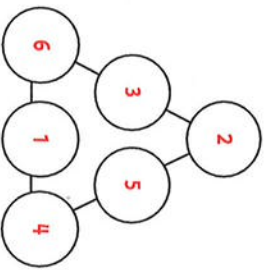
oefenen.



elke zijde 10.

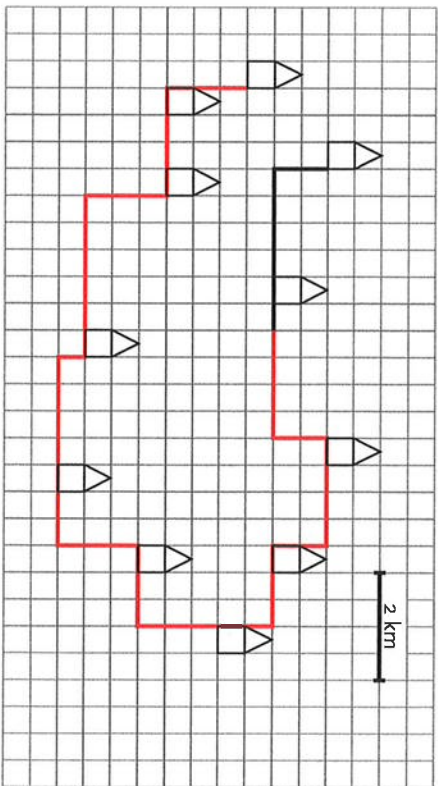


elke zijde 11.



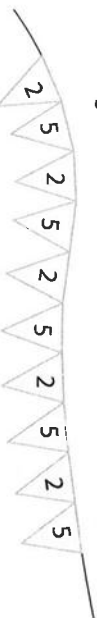
20

teken een weg langs alle huizen.
hoe lang is deze weg? **29 km.** **meer antwoorden.**



21

welke slinger?



35 slinger